

METHODIST GIRLS' SCHOOL (PRIMARY)

Founded in 1887



END-OF-YEAR EXAMINATION 2011 PRIMARY 3 MATHEMATICS BOOKLET A

Total Time: 1 h 45 minutes

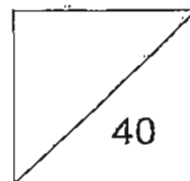
INSTRUCTIONS TO CANDIDATES

Do not turn over this page until you are told to do so.
Follow all instructions carefully.
Answer all questions.

Name: _____ ()

Class: Primary 3. _____

Date: 11 October 2011



This booklet consists of 9 printed pages including this page.

Section A

Questions 1 to 20 carry 2 marks each. For each question, four options are given. One of them is the correct answer. Make your choice (1, 2, 3 or 4). Shade the oval (1, 2, 3 or 4) on the Optical Answer Sheet. (40 marks)

1 $7\,305 = 7000 + 30 \times \boxed{} + 5$

- (1) 1
- (2) 10
- (3) 3
- (4) 100

2 What is the missing value in the box?

$$\begin{array}{r}
 8 \quad 5 \quad \boxed{} \quad 6 \\
 - \quad 5 \quad 9 \quad 8 \quad 7 \\
 \hline
 2 \quad 5 \quad 1 \quad 9
 \end{array}$$

- (1) 9
- (2) 7
- (3) 3
- (4) 0

3 Complete the number pattern below.

2864, 3954, _____, 6134, 7 224

- (1) 4 064
- (2) 5 044
- (3) 5 064
- (4) 6 044

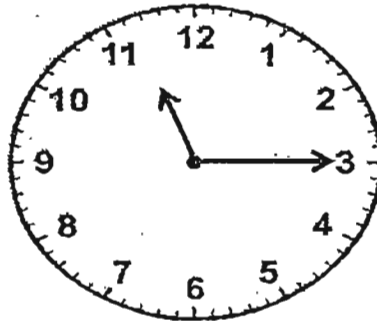
4 What is the **smallest odd number** that can be formed with the digits 3, 4, 5 and 7 with the digit 5 in the tens place?

- (1) 7 543
- (2) 7 453
- (3) 3 547
- (4) 3 457

- 5 After Alicia had spent \$125 and Flora had spent \$194, both of them had the same amount of money left. If Alicia had \$500 at first, how much did Flora have at first?

- (1) \$319
- (2) \$375
- (3) \$569
- (4) \$694

- 6 The time on the clock is 25 minutes fast. What is the actual time?



- (1) 11.25
 - (2) 11.40
 - (3) 10.50
 - (4) 10.45
- 7 Which of the following fractions is not equivalent to $\frac{2}{4}$?

- (1) $\frac{1}{2}$
- (2) $\frac{3}{5}$
- (3) $\frac{4}{8}$
- (4) $\frac{5}{10}$

- 8 Which fish has the greatest mass?



A

1kg 300g



B

1 003g



C

1 303g

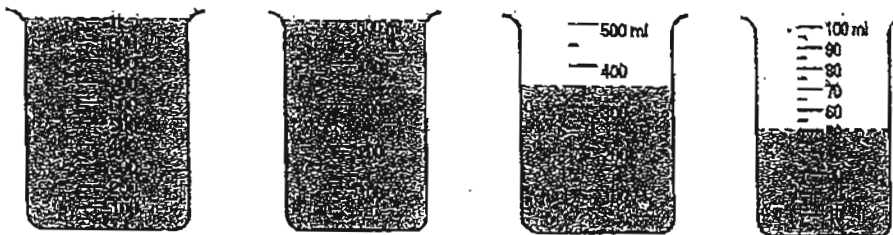
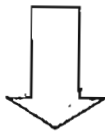
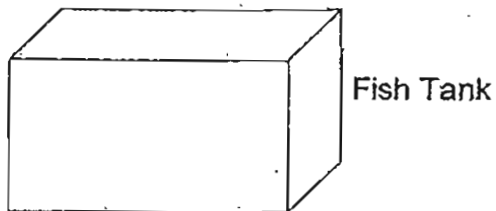


D

1kg 30g

- (1) A
(2) B
(3) C
(4) D
- 9 The mass of a bag of rice is 800g. It is 5 times as heavy as a bag of sugar. What is the total mass of a bag of rice and a bag of sugar?
- (1) 160g
(2) 960g
(3) 4000g
(4) 4800g
- 10 Nathan jogs round a 400-m track 4 times a week. What is the total distance he jogs in 2 weeks?
- (1) 1 km 600 m
(2) 2 km 800 m
(3) 3 km 200 m
(4) 5 km 600 m

- 11 The four cylinders below show the amount of water the fish tank can hold. What is the capacity of the fish tank?



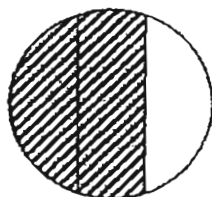
- (1) 2 l
 (2) 1 l 950 ml
 (3) 1 l 900 ml
 (4) 1 l 850 ml
- 12 Belinda took 1 hour 10 minutes to complete a walk-a-jog. Rita took 25 minutes less to complete the same walk-a-jog. How long did Rita take to complete the walk-a-jog?
- (1) 45 minutes
 (2) 55 minutes
 (3) 1 h 15 minutes
 (4) 1 h 35 minutes

- 13 Wendy wanted to make drinks for her guests. She mixed 2 bottles of Ribena syrup with 8 cans of soda water. 1 bottle of Ribena contains 1 l 500 ml of syrup and 1 can contains 330 ml of soda water. What was the total amount of drinks made?

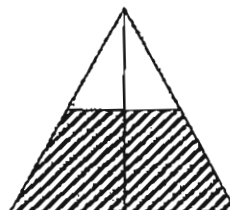
- (1) 2 l 640 ml
- (2) 4 l 140 ml
- (3) 5 l 400 ml
- (4) 5 l 640 ml

- 14 Which diagram shows that $\frac{2}{3}$ of it is shaded?

(1)



(2)



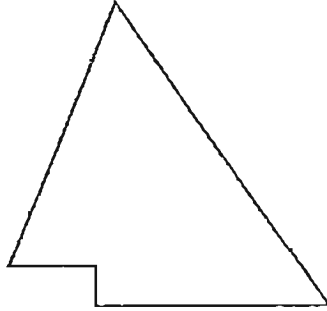
(3)



(4)

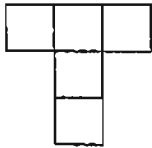


- 15 How many angles in the figure below are smaller than a right angle?



- (1) 1
(2) 2
(3) 3
(4) 4

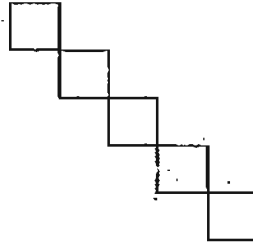
- 16 Which of the following figures below have the same perimeter?



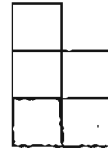
A



B



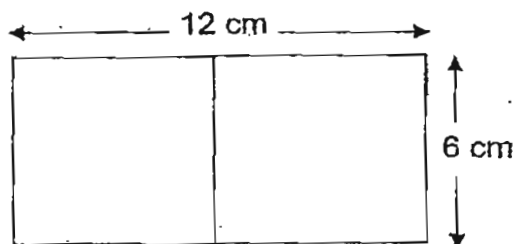
C



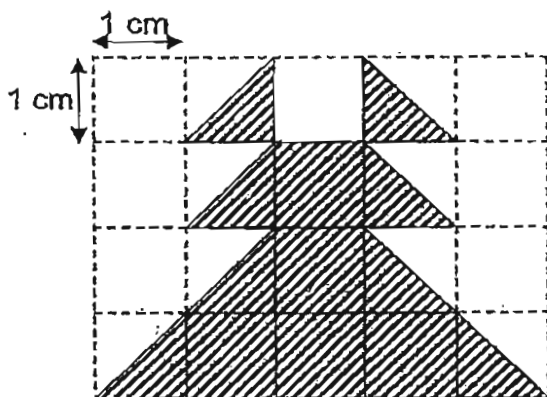
D

- (1) A and C
(2) B and C
(3) C and D
(4) A and B

- 17 Judy has a rectangular piece of cardboard, 12 cm by 6 cm. She cut it into two halves to do her artwork. What is the perimeter of each half of the cardboard after it has been cut?

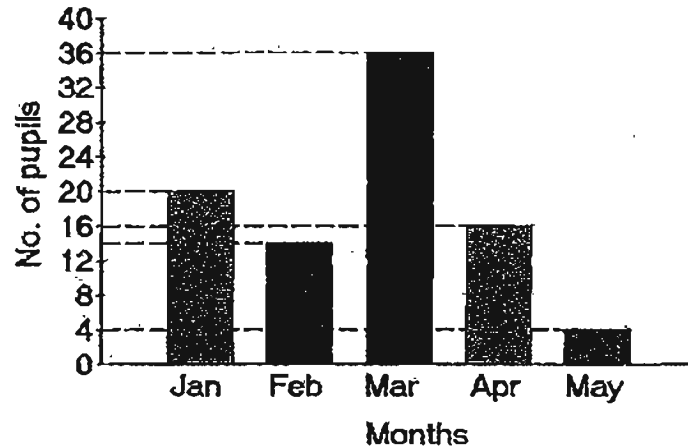


- (1) 36 cm
(2) 24 cm
(3) 18 cm
(4) 12 cm
- 18 Jane shaded triangles and squares on the 1-cm grid square paper. What is the area of the shaded parts?



- (1) 9 cm²
(2) 10 cm²
(3) 12 cm²
(4) 14 cm²

The bar graph below shows the birth months of the students in Fairyland Girls School. Study it and answer questions 19 and 20.



- 19 How many more people were born in March than in February?
- (1) 14
 - (2) 20
 - (3) 22
 - (4) 36
- 20 In which month was there four times as many students born than in the month of May?
- (1) January
 - (2) February
 - (3) March
 - (4) April

METHODIST GIRLS' SCHOOL (PRIMARY)

Founded in 1887



END-OF-YEAR EXAMINATION 2011 PRIMARY 3 MATHEMATICS BOOKLET B

Total Time: 1 h 45 minutes

INSTRUCTIONS TO CANDIDATES

Do not turn over this page until you are told to do so.

Follow all instructions carefully.

Answer all questions.

Name: _____ ()

Class: Primary 3. _____

Date: 11 October 2011

BOOKLET A	40
BOOKLET B	40
BOOKLET C	20
TOTAL	100

This booklet consists of 8 printed pages including this page.

Questions 21 to 40 carry 2 marks each. Write your answers in the spaces provided.
For questions which require units, give your answers in the units stated. (40 marks)

- 21 Write 8 593 in words.

- 22 How many eighths are there in $2\frac{1}{4}$?

Ans: _____

- 23 In a row of 10 vases, Jane placed 3 flowers between every 2 vases. How many flowers did she place altogether?



Ans: _____

- 24 Arrange the following fractions starting from the greatest.

$$\frac{2}{5}, \quad \frac{2}{9}, \quad \frac{2}{7}$$

Ans: _____

(Go on to the next page)

- 25 Mrs Siva had 59 stickers. She wanted to give 9 stickers to those who scored above 85 marks in her Mathematics class but would need 13 stickers more. How many pupils scored above 85 marks?

Ans: _____

- 26 Sophia bought 6 identical pencils and 2 identical files for a total of \$18. Each pencil costs \$2. What is the cost of a file?

Ans: \$_____

- 27 Stacey spent $\frac{1}{6}$ of her money on a purse and $\frac{7}{12}$ more money on a bag than on the purse. What fraction of her money did she spend?

Ans: _____

28

$$\bigcirc + \bigcirc + \star = 14$$

$$\bigcirc + \star = 9$$

$$\bigcirc + \star + \star = \boxed{?}$$

What is the missing number in the box?

Ans: _____

- 29 Sheila took 15 minutes to draw a picture of a cat. How long will she take to draw 10 cats?

Ans: _____ h _____ min

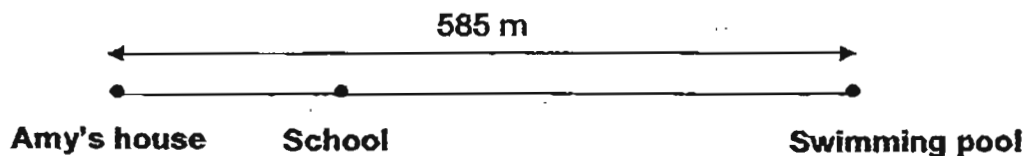
- 30 Josh is 152 cm tall. Tim is 40 cm shorter. What is their total height?

Ans: _____ m _____ cm

- 31** Karen bought a carpet measuring 3 m by 2 m. She placed the carpet in her living room which is 5 m long and 7 m wide. What is the area of her living room that is not covered by the carpet?

Ans: _____ m²

- 32** The distance between Amy's house and the swimming pool is 3 times the distance from her house to the school. What is the distance between the school and the swimming pool?

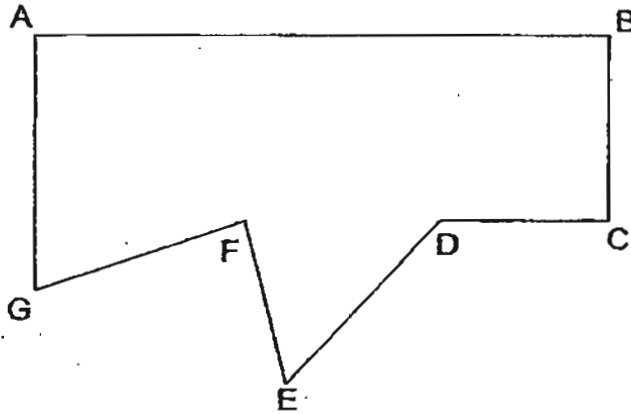


Ans: _____ m

- 33** Trisha and Anne started drawing at 2.15 p.m. Trisha took 20 minutes to complete her drawing while Anne took twice the amount of time to finish her drawing. At what time did Anne finish her drawing?

Ans: _____ p.m.

- 34 Name a pair of perpendicular lines in the figure below.



Ans: _____ \perp _____

- 35 Emily had \$1 302 and Colin had \$674. How much must Emily give to Colin so that each of them has the same amount of money?

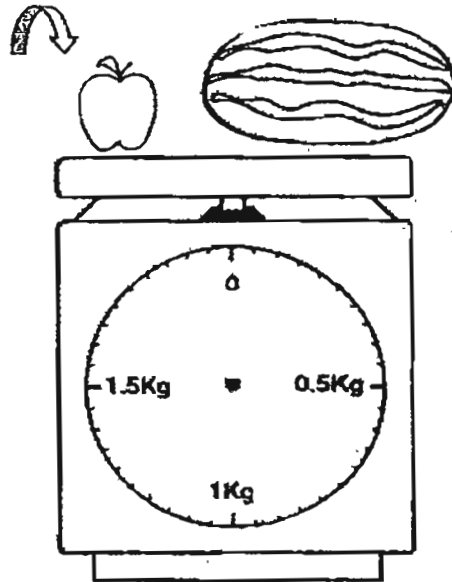
Ans: \$ _____

- 36 A school bus can take a maximum of 30 pupils. If there are 280 students going for an excursion, how many school buses must the teacher charter such that all the pupils can go for the trip?

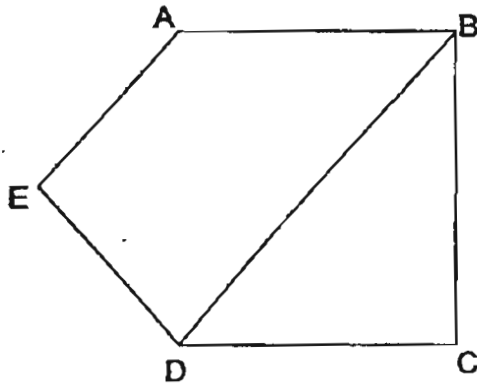
Ans: _____

(Go on to the next page)

- 37 The watermelon has a mass of 950 g. Draw the pointer to show the reading on the kitchen scale if an apple of a mass of 100g is added to the scale.

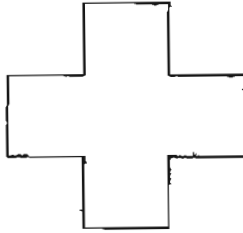


- 38 Name a pair of parallel lines in the figure below.



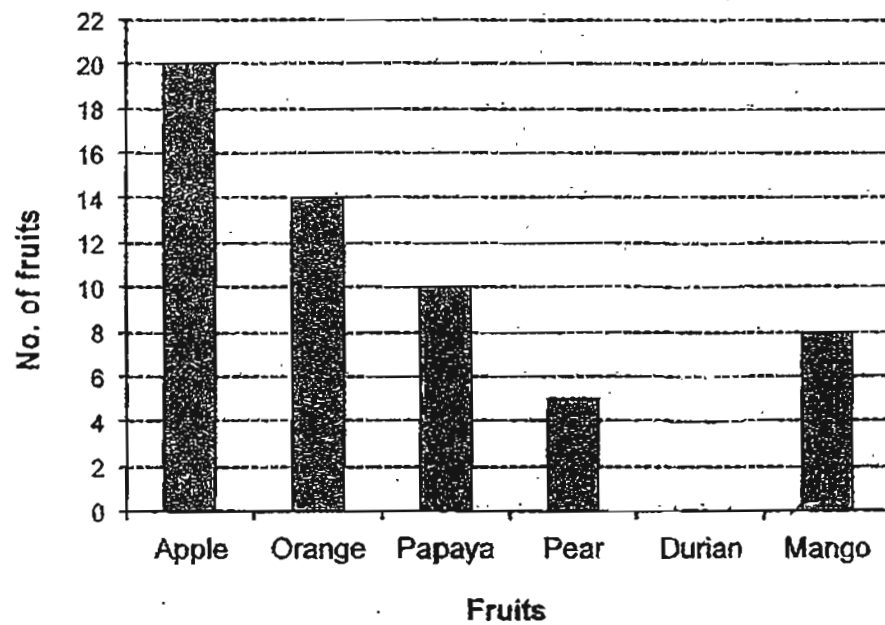
Ans: _____ // _____

- 39 How many right angles are there inside the figure below?



Ans: _____

- 40 The graph below shows the type of fruits sold on Monday.



The total number of fruits sold is 70. Use a ruler and draw in the number of durians sold in the graph above.

METHODIST GIRLS' SCHOOL (PRIMARY)

Founded in 1887



END-OF-YEAR EXAMINATION 2011 PRIMARY 3 MATHEMATICS BOOKLET C

Total Time: 1 h 45 minutes

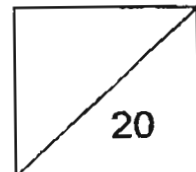
INSTRUCTIONS TO CANDIDATES

Do not turn over this page until you are told to do so.
Follow all instructions carefully.
Answer all questions.

Name: _____ ()

Class: Primary 3. _____

Date: 11 October 2011



This booklet consists of 4 printed pages including this page.

For questions 41 to 45, show your working clearly and write your answers in the space provided. The number of marks available is shown in brackets [] at the end of each question or part-question. (20 marks)

- 41 One book cost \$9. For every 10 books bought, 3 books were given free. How much would Tracy have to pay if she needed 26 such books?

Ans: _____ [4]

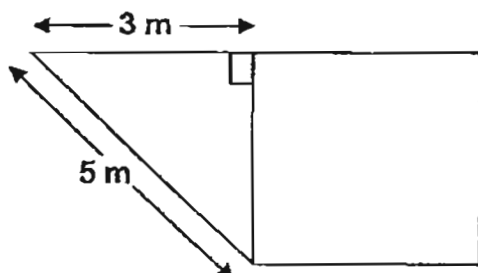
- 42 Rani has a ribbon that is 1 m long. She cuts it into 3 pieces, A, B and C. Ribbon A is $\frac{1}{3}$ m long. Ribbon B is $\frac{1}{6}$ m longer than Ribbon A. What is the length of Ribbon C?

Ans: _____ [4]

(Go on to the next page)

- 43 The figure below is made up of a triangle and a square. The perimeter of the triangle is 12 m.

- (a) Find the perimeter of the figure.
(b) Find the area of the square.



Ans: (a) _____ [2]

(b) _____ [2]

- 44 A train left Town A at a certain time. It took 2 h 35 min to reach Town B. The train then took 1 h 45 min to travel from Town B to Town C.

- (a) How much faster is it to travel from Town B to Town C than Town A to Town B?
(b) If the train reached Town B at 1.10 p.m., what time did it leave Town A?

Ans: (a) _____ [2]

(b) _____ [2]

(Go on to the next page)

- 45** A chair has 4 legs. A stool has 3 legs. There are 64 legs altogether. If there are 2 more chairs than stools, how many chairs are there?

Ans: _____ [4]

End of Paper

Answer Ke

EXAM PAPER 2011

SCHOOL : MGS

SUBJECT : PRIMARY 3 MATHEMATICS

TERM : SA2

Q1	Q2	Q3	Q4	Q5	Q6	Q7	Q8	Q9	Q10	Q11	Q12	Q13	Q14	Q15	Q16	Q17
2	4	2	4	3	3	2	3	2	3	3	1	4	4	3	4	2

Q18	Q19	Q20
1	3	4

21) Eight thousand, five hundred and ninety-three

22) 18

23) 27

24) $2/5$, $2/7$, $2/9$

25) 8 pupils

26) \$3

27) $11/12$

28) 13

29) 2h 30 min

30) 2m 64cm

31) 29m²

32) 390m

33) 2.55p.m.

34) $AB \perp BC$

35) \$314

36) 10

37)

38) $AB \parallel CD$

39) 8

40)

41) $10 \times 9 = 90$

$90 + 90 = 180$

Tracy would have to pay \$180.

42) $RA = 1/3 \times 2 = 2/6$

$RB = 2/6 + 1/6 = 3/6$

$RC = 3/6 + 2/6 = 5/6$

$6/6 - 5/6 = 1/6$

Ribbon C is $1/6$ m long.

43) a) $5 + 3 = 8$

$12 - 8 = 4$

$5 + 4 + 4 = 13$

$13 + 3 = 16$

$16 + 4 = 20$

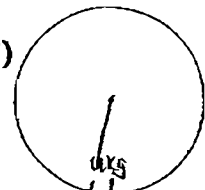
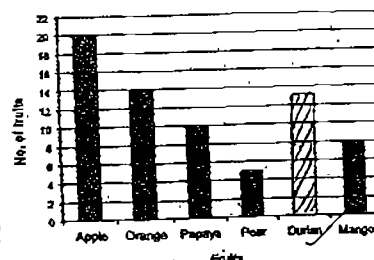
The perimeter of the figure is 20m

b) $4 \times 4 = 16$

The area of the square is 16m²

44) a) $2\text{h } 35\text{min} - 1\text{h } 45\text{min} = 50\text{min}$

It is 50 min faster to travel from Town B to Town C than Town A to Town B.



44)b)It left Town A at 10.35am

45) $64 - 8 = 56$

$56 \div 7 = 8$

$8 + 2 = 10$

There are 10 chairs.